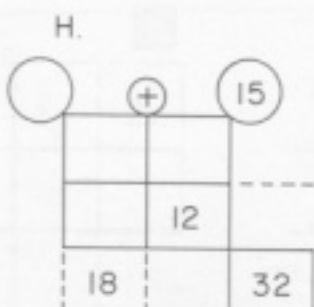
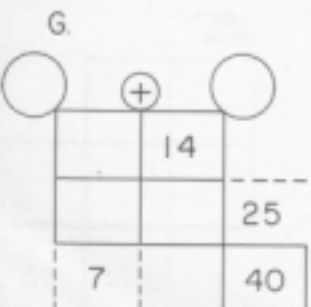
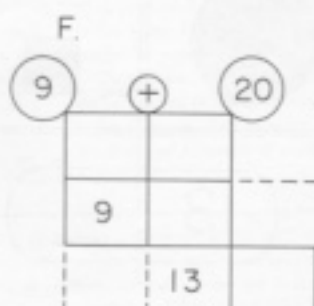
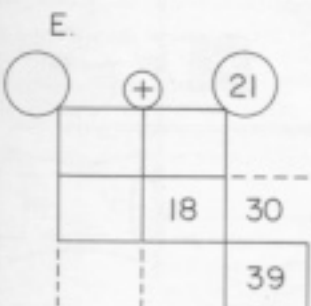
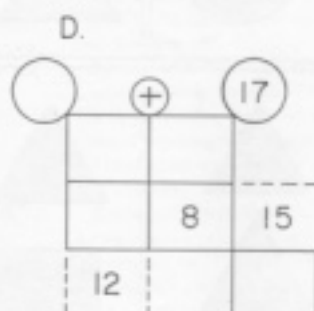
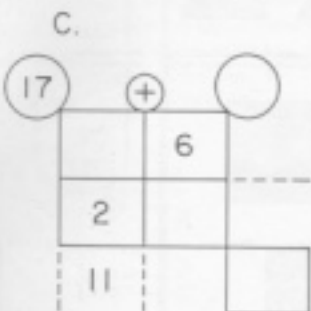
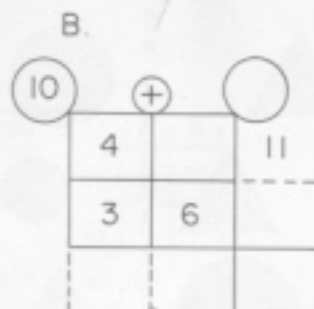
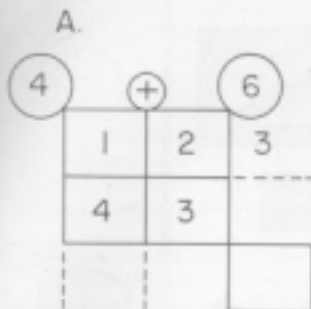


Fill in the missing numbers. The numbers must add across rows and columns.
The circles in the corner must add to be the total.



What's my rule?

I.

8	17
1	24
15	10
10	15
4	
17	
	20
	9

What's my rule?

J.

7	14
0	7
5	12
13	20
9	
	11
15	
	17

A.

4	+	6
1	2	3
4	3	7
5	5	10

B.

10	+	10
4	7	11
3	6	9
7	13	20

C.

17	+	8
9	6	15
2	8	10
11	14	25

D.

13	+	17
5	10	15
7	8	15
12	18	30

E.

18	+	21
0	9	9
12	18	30
12	27	39

F.

9	+	20
7	11	18
9	2	11
16	13	29

G.

20	+	20
1	14	15
6	19	25
7	33	40

H.

17	+	15
5	2	7
13	12	25
18	14	32

What's my rule?

x I. $25-x$

8	17
1	24
15	10
10	15
4	21
17	8
5	20
16	9

What's my rule?

x J. $x+7$

7	14
0	7
5	12
13	20
9	16
4	11
15	22
10	17